










Name: \_\_\_\_\_

Date: \_\_\_\_\_

# Mathematics: Numbers

0	1	2	3	4	5	6	7	8	9	10	11	12	13	14	15	16	17	18	19	20
---	---	---	---	---	---	---	---	---	---	----	----	----	----	----	----	----	----	----	----	----

Draw the right number of circles in each of the boxes.



Name: \_\_\_\_\_

Date: \_\_\_\_\_

# Mathematics: Numbers

0	1	2	3	4	5	6	7	8	9	10	11	12	13	14	15	16	17	18	19	20
---	---	---	---	---	---	---	---	---	---	----	----	----	----	----	----	----	----	----	----	----

Draw the right number of circles in each of the boxes.

